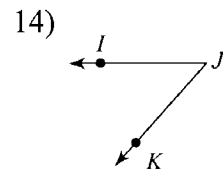
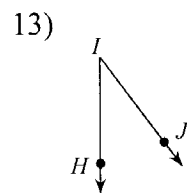
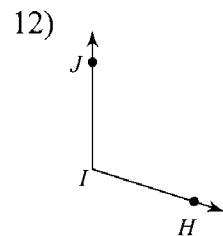
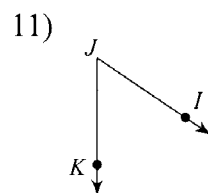
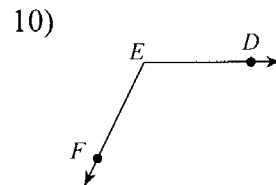
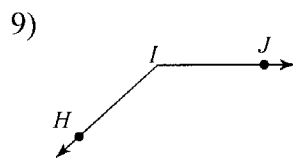
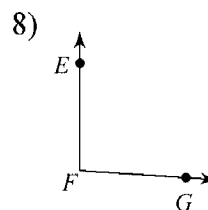
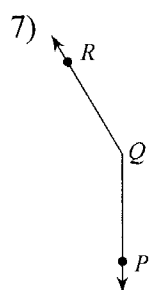
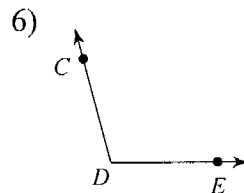
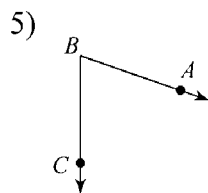
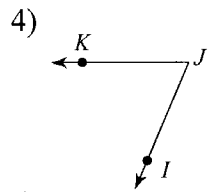
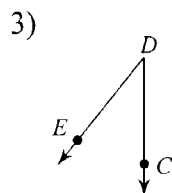
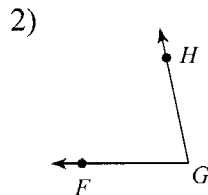
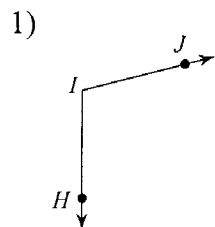


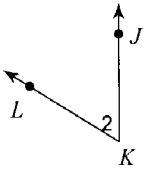
6-2 Naming & Classifying Angles (ver1)\_hw

Name the vertex and sides of each angle.

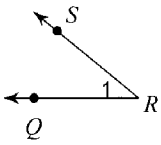


Name each angle in four ways.

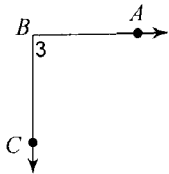
15)



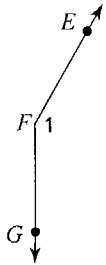
17)



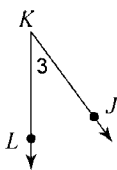
19)



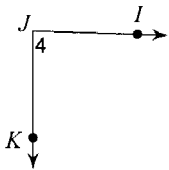
21)



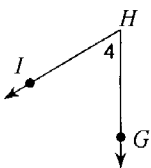
23)



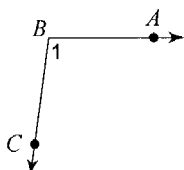
25)



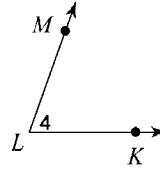
27)



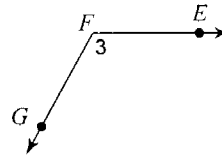
29)



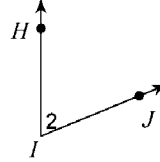
16)



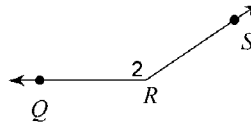
18)



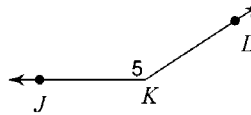
20)



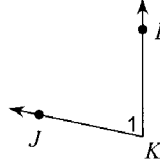
22)



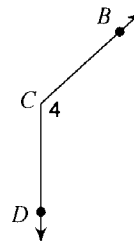
24)



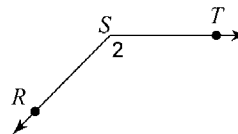
26)



28)



30)



Answers to 6-2 Naming & Classifying Angles (ver1)\_hw

- |   |   |   |   |
|---|---|---|---|
| 1) $\overrightarrow{IJ}$ and $\overrightarrow{IH}$        | 4) $J$ , $\overrightarrow{JI}$ and $\overrightarrow{JK}$  | 17) $\angle R$ , $\angle 1$ , $\angle QRS$ , $\angle SRQ$ | 18) $\angle F$ , $\angle 3$ , $\angle EFG$ , $\angle GFE$ |
| 5) $\overrightarrow{B, BA}$ and $\overrightarrow{BC}$     | 8) $F$ , $\overrightarrow{FE}$ and $\overrightarrow{FG}$  | 20) $\angle I$ , $\angle 2$ , $\angle HIJ$ , $\angle JIH$ | 21) $\angle F$ , $\angle 1$ , $\angle EFG$ , $\angle GFE$ |
| 9) $I$ , $\overrightarrow{IJ}$ and $\overrightarrow{IH}$  | 12) $I$ , $\overrightarrow{IJ}$ and $\overrightarrow{IH}$ | 23) $\angle K$ , $\angle 3$ , $\angle JKL$ , $\angle LKJ$ | 24) $\angle K$ , $\angle 5$ , $\angle JKL$ , $\angle LKJ$ |
| 13) $I$ , $\overrightarrow{IJ}$ and $\overrightarrow{IH}$ | 15) $\angle K$ , $\angle 2$ , $\angle LKJ$ , $\angle JKL$ | 26) $\angle K$ , $\angle 1$ , $\angle JKL$ , $\angle LKJ$ | 27) $\angle H$ , $\angle 4$ , $\angle GHI$ , $\angle IHG$ |
| 16) $\angle L$ , $\angle 4$ , $\angle MLK$ , $\angle KLM$ | 18) $\angle F$ , $\angle 3$ , $\angle EFG$ , $\angle GFE$ | 28) $\angle B$ , $\angle 1$ , $\angle ABC$ , $\angle CBA$ | 30) $\angle S$ , $\angle 2$ , $\angle TSR$ , $\angle RST$ |
| 19) $\angle B$ , $\angle 3$ , $\angle ABC$ , $\angle CBA$ | 21) $\angle F$ , $\angle 1$ , $\angle EFG$ , $\angle GFE$ | 29) $\angle B$ , $\angle 1$ , $\angle ABC$ , $\angle CBA$ |   |
| 22) $\angle R$ , $\angle 2$ , $\angle QRS$ , $\angle SRQ$ | 24) $\angle K$ , $\angle 5$ , $\angle JKL$ , $\angle LKJ$ | 28) $\angle C$ , $\angle 4$ , $\angle BCD$ , $\angle DCB$ |   |
| 25) $\angle J$ , $\angle 4$ , $\angle IJK$ , $\angle KJI$ | 27) $\angle H$ , $\angle 4$ , $\angle GHI$ , $\angle IHG$ |   |   |
| 28) $\angle C$ , $\angle 4$ , $\angle BCD$ , $\angle DCB$ | 30) $\angle S$ , $\angle 2$ , $\angle TSR$ , $\angle RST$ |   |   |